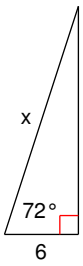


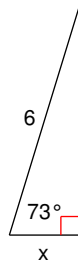
Solving Right Triangles

Find the missing side. Round to the nearest tenth.

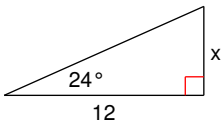
1)



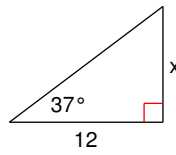
2)



3)



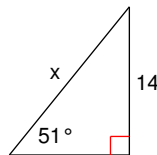
4)



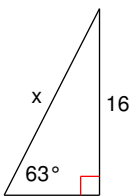
5)



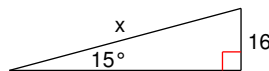
6)



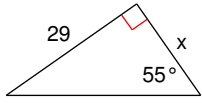
7)



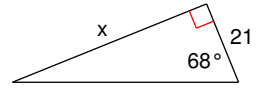
8)



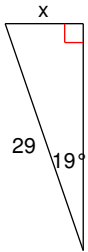
9)



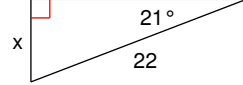
10)



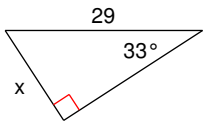
11)



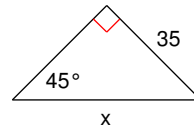
12)



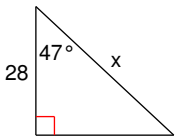
13)



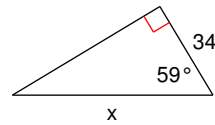
14)



15)



16)



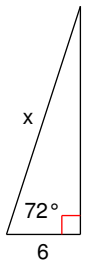
Critical thinking question:

17) Write a new problem that is similar to the others on this worksheet. Solve the question you wrote.

Solving Right Triangles

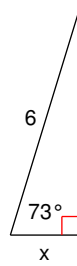
Find the missing side. Round to the nearest tenth.

1)



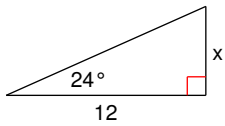
19.4

2)



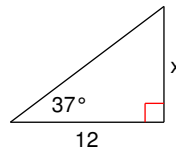
1.8

3)



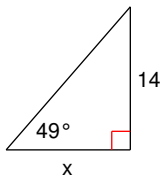
5.3

4)



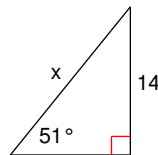
9.0

5)



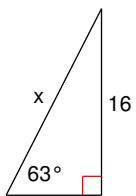
12.2

6)



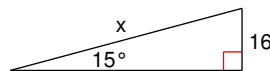
18.0

7)

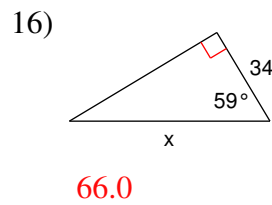
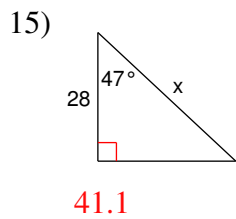
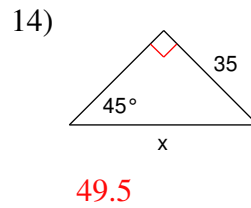
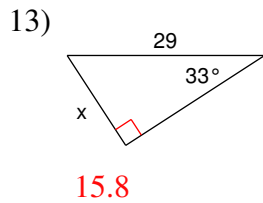
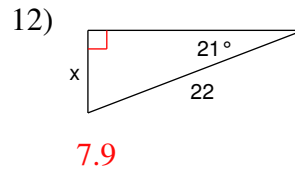
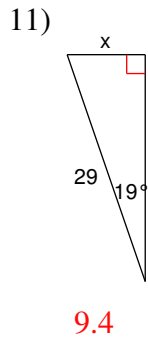
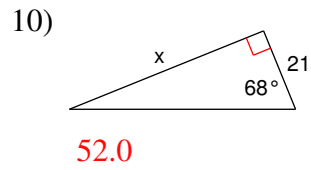
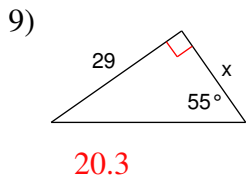


18.0

8)



61.8



Critical thinking question:

17) Write a new problem that is similar to the others on this worksheet. Solve the question you wrote.

Many answers.